
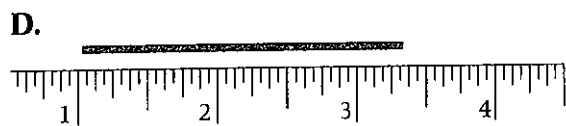
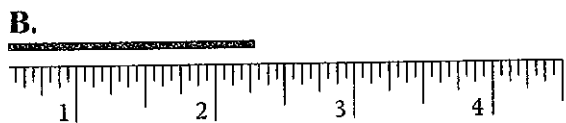
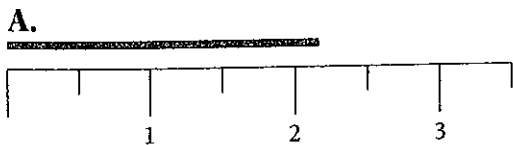


WHAT'S THE MEASURE?



Use the standard or nonstandard tool provided for each line segment to measure its length.

Circle the letter of each line segment that is approximately $2\frac{1}{4}$ units long.



Explain Choices:

A.

B.

C.

D.

E.